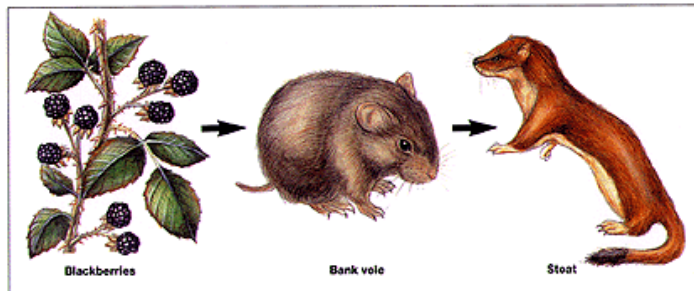

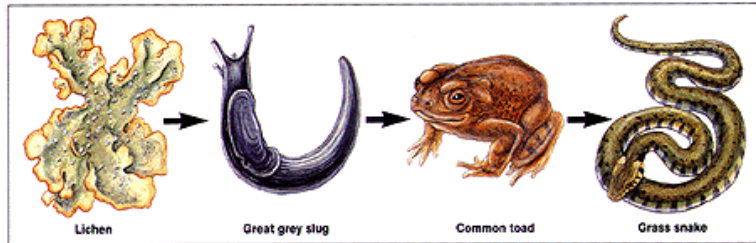


Name \_\_\_\_\_

Hour \_\_\_\_\_ Date \_\_\_\_\_

- **Circle** the producers in each food chain
- Draw a **square** around the consumers in each food chain
- Draw a **triangle** around the herbivores in each food chain
- Draw a **heart** around the carnivores in each food chain



*Some items may have more than one shape around them*

Fill in the Blank

**Complete the following similes using the vocabulary words provided**

1. Producer is to corn as \_\_\_\_\_ is to shark
2. Herbivore is to rabbit as \_\_\_\_\_ is bear
3. \_\_\_\_\_ is to sun energy as chemosynthesis is to chemical energy

**word bank**  
Photosynthesis  
Omnivore  
Consumer

**Short Answer**

**Answer the following questions**

- 1) Identify the main source of energy for all life on earth.
- 2) Explain the difference between a food web and a food chain.